

Exercise 2D

1 $x = a \cos \theta, y = b \sin \theta$

$$\frac{dy}{dx} = -\frac{b \cos \theta}{a \sin \theta}$$

So tangent is

$$y - b \sin \theta = -\frac{b \cos \theta}{a \sin \theta}(x - a \cos \theta)$$

Equation of tangent is $bx \cos \theta + ay \sin \theta = ab$

Normal gradient is $\frac{a \sin \theta}{b \cos \theta}$

So normal is $y - b \sin \theta = \frac{a \sin \theta}{b \cos \theta}(x - a \cos \theta)$

Equation of normal is:

$$ax \sin \theta - by \cos \theta = (a^2 - b^2) \sin \theta \cos \theta$$

a $a = 2, b = 1$

So equation of tangent is:

$$x \cos \theta + 2y \sin \theta = 2$$

Equation of normal is:

$$2x \sin \theta - y \cos \theta = 3 \sin \theta \cos \theta$$

b $\frac{x^2}{25} + \frac{y^2}{9} = 1 \Rightarrow a = 5, b = 3$

So equation of tangent is:

$$3x \cos \theta + 5y \sin \theta = 15$$

Equation of normal is:

$$5x \sin \theta - 3y \cos \theta = 16 \sin \theta \cos \theta$$

2 a $\frac{x^2}{9} + y^2 = 1 \Rightarrow \frac{2x}{9} + 2y \frac{dy}{dx} = 0$

$$\therefore \frac{dy}{dx} = -\frac{x}{9y} \text{ so at } \left(\sqrt{5}, \frac{2}{3}\right) m = -\frac{\sqrt{5}}{6}$$

Tangent at

$$\left(\sqrt{5}, \frac{2}{3}\right) \text{ is } y - \frac{2}{3} = -\frac{\sqrt{5}}{6}(x - \sqrt{5})$$

$$\Rightarrow 6y + \sqrt{5}x = 9$$

Normal at

$$\left(\sqrt{5}, \frac{2}{3}\right) \text{ is } y - \frac{2}{3} = \frac{6}{\sqrt{5}}(x - \sqrt{5})$$

$$3\sqrt{5}y - 2\sqrt{5} = 18x - 18\sqrt{5}$$

$$\Rightarrow 3\sqrt{5}y = 18x - 16\sqrt{5}$$

2 b $\frac{x^2}{16} + \frac{y^2}{4} = 1 \Rightarrow \frac{x}{8} + \frac{y}{2} \frac{dy}{dx} = 0$

$$\therefore \frac{dy}{dx} = -\frac{x}{4y} \text{ so at } (-2, \sqrt{3}) m = \frac{1}{2\sqrt{3}}$$

Tangent at

$$(-2, \sqrt{3}) \text{ is } y - \sqrt{3} = \frac{1}{2\sqrt{3}}(x - (-2))$$

$$\Rightarrow 2\sqrt{3}y - x = 8$$

Normal at

$$(-2, \sqrt{3}) \text{ is } y - \sqrt{3} = -2\sqrt{3}(x - (-2))$$

$$\Rightarrow y + 2\sqrt{3}x = -3\sqrt{3}$$

3 Use the chain rule to find the gradient:

$$\frac{dy}{dx} = \frac{\frac{dy}{dt}}{\frac{dx}{dt}} = \frac{b \cos t}{-a \sin t}$$

Then the equation of the tangent is given by

$$(y - b \sin t) = -\frac{b \cos t}{a \sin t}(x - a \cos t)$$

$$ay \sin t - ab \sin^2 t = -bx \cos t + ab \cos^2 t$$

$$bx \cos t + ay \sin t = ab$$

4 a Using the method in Example 13, substitute for y in the equation of the ellipse.

$$\frac{x^2}{4} + y^2 = 1 \Rightarrow \frac{x^2}{4} + (x + \sqrt{5})^2 = 1$$

$$\text{So } x^2 + 4(x^2 + 2\sqrt{5}x + 5) = 4$$

$$5x^2 + 8\sqrt{5}x + 16 = 0$$

This has discriminant:

$$(8\sqrt{5})^2 - 4 \times 5 \times 16 = 0$$

So the line meets the ellipse at only one point and therefore is a tangent to the ellipse.

- 4 b** To find the point of contact, solve the equation from part **a** for x :

$$5x^2 + 8\sqrt{5}x + 16 = 0$$

$$(\sqrt{5}x + 4)^2 = 0$$

$$\Rightarrow x = -\frac{4}{\sqrt{5}} = -\frac{4}{5}\sqrt{5}$$

$$\Rightarrow y = -\frac{4}{5}\sqrt{5} + \sqrt{5} = \frac{1}{5}\sqrt{5}$$

So the point of contact is $\left(-\frac{4}{5}\sqrt{5}, \frac{1}{5}\sqrt{5}\right)$

- 5 a** $x = 3 \cos \theta, y = 2 \sin \theta \Rightarrow \frac{dy}{dx} = \frac{2 \cos \theta}{-3 \sin \theta}$

So gradient of normal is $\frac{3 \sin \theta}{2 \cos \theta}$

Equation of normal is:

$$y - 2 \sin \theta = \frac{3 \sin \theta}{2 \cos \theta} (x - 3 \cos \theta)$$

$$2y \cos \theta - 4 \cos \theta \sin \theta$$

$$= 3x \sin \theta - 9 \sin \theta \cos \theta$$

$$2y \cos \theta - 3x \sin \theta$$

$$= -5 \sin \theta \cos \theta$$

- 5 b** Normal at P crosses the x -axis at

$$y = 0, x = -\frac{5}{6}$$

Substituting into the equation for the normal from part **a**:

$$\frac{15}{6} \sin \theta = -5 \sin \theta \cos \theta$$

$$\Rightarrow \sin \theta \left(\frac{1}{2} + \cos \theta \right) = 0$$

$$\Rightarrow \sin \theta = 0 \text{ or } \cos \theta = -\frac{1}{2}$$

$\sin \theta = 0$ gives $\theta = 0^\circ$ or 180°

$\cos \theta = -\frac{1}{2}$ gives $\theta = 120^\circ$ or 240°

$$\theta = 0^\circ \Rightarrow x = 3, y = 0$$

$$\theta = 180^\circ \Rightarrow x = -3, y = 0$$

$$\theta = 120^\circ \Rightarrow x = \frac{3}{2}, y = \sqrt{3}$$

$$\theta = 240^\circ \Rightarrow x = -\frac{3}{2}, y = -\sqrt{3}$$

So the coordinates of other possible positions of P are

$$(3, 0), (-3, 0), \left(-\frac{3}{2}, \sqrt{3}\right) \text{ or } \left(-\frac{3}{2}, -\sqrt{3}\right)$$

- 6** $y = mx + c$ is a tangent to $\frac{x^2}{a^2} + \frac{y^2}{b^2} = 1$

$$\text{if } a^2 m^2 + b^2 = c^2$$

$$y = 2x + c \Rightarrow m = 2, c = ?$$

$$x^2 + \frac{y^2}{4} = 1 \Rightarrow a = 1, b = 2$$

$$a^2 m^2 + b^2 = c^2 \Rightarrow 1 \times 4 + 4 = c^2$$

$$c^2 = 8 \text{ so } c = \pm 2\sqrt{2}$$

- 7 Substitute $y = mx + 3$ into the equation for the ellipse.

$$x^2 + \frac{(mx+3)^2}{5} = 1$$

$$5x^2 + (mx+3)^2 = 5$$

$$(5+m^2)x^2 + 6mx + 4 = 0$$

Since the line is a tangent the discriminant of this equation must equal zero (must have equal roots).

$$\text{So } 36m^2 = 4 \times (5+m^2) \times 4 = 80 + 16m^2$$

$$20m^2 = 80$$

$$m^2 = 4$$

$$\therefore m = \pm 2$$

The $a^2m^2 + b^2 = c^2$ condition could be used as in question 6.

- 8 a $y = mx + 4$, $\frac{x^2}{3} + \frac{y^2}{4} = 1$

$$\Rightarrow c = 4, a^2 = 3, b^2 = 4$$

Using the condition $a^2m^2 + b^2 = c^2$:

$$a^2m^2 + b^2 = c^2$$

$$\Rightarrow 3m^2 + 4 = 16$$

$$3m^2 = 12$$

$$m = \pm 2$$

But $m > 0$, so $m = 2$

- b $y = 2x + 4$, $\frac{x^2}{3} + \frac{y^2}{4} = 1$

Substitute into the equation for the ellipse:

$$\frac{x^2}{3} + \frac{(4x^2 + 16x + 16)}{4} = 1$$

$$\Rightarrow x^2 + 3x^2 + 12x + 12 = 3$$

$$4x^2 + 12x + 9 = 0$$

$$(2x+3)^2 = 0$$

$$x = -\frac{3}{2}, y = 2x + 4 = 1$$

So P is $(-\frac{3}{2}, 1)$

- 8 c Gradient of normal is $-\frac{1}{2}$

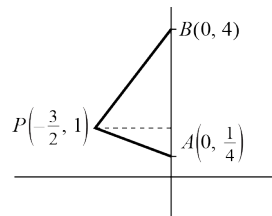
Equation of normal at P is

$$y - 1 = -\frac{1}{2}\left(x - \left(-\frac{3}{2}\right)\right)$$

$$x = 0 \Rightarrow y = 1 - \frac{3}{4} = \frac{1}{4}$$

So A is $(0, \frac{1}{4})$

- d Tangent is $y = 2x + 4$, $x = 0 \Rightarrow y = 4$



So B is $(0, 4)$

$$\begin{aligned} \text{Area of } \triangle APB &= \frac{1}{2} \left(4 - \frac{1}{4}\right) \times \frac{3}{2} \\ &= \frac{1}{2} \times \frac{15}{4} \times \frac{3}{2} = \frac{45}{16} \end{aligned}$$

- 9 a $\frac{dy}{d\theta} = 2 \cos \theta$, $\frac{dx}{d\theta} = -3 \sin \theta$

$$\frac{dy}{dx} = \frac{2 \cos \theta}{-3 \sin \theta} = -\frac{2}{3} \cot \theta$$

- b $\left(\frac{9}{5}\right)^2 + \left(\frac{-8}{5}\right)^2 = \frac{9}{25} + \frac{16}{25} = 1 = \text{RHS}$

So $Q\left(\frac{9}{5}, -\frac{8}{5}\right)$ lies on E

- c Let Q be the point $(3 \cos \phi, 2 \sin \phi)$

Using the coordinates of Q :

$$\frac{9}{5} = 3 \cos \phi \Rightarrow \cos \phi = \frac{3}{5}$$

$$-\frac{8}{5} = 2 \sin \phi \Rightarrow \sin \phi = -\frac{4}{5}$$

$$\text{So } \cot \phi = -\frac{3}{4}$$

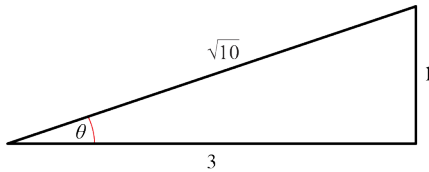
Gradient of tangent at Q is

$$-\frac{2}{3} \cot \phi = -\frac{2}{3} \times -\frac{3}{4} = \frac{1}{2}$$

- 9 d Tangent at P is perpendicular to tangent at Q , so gradient of tangent at $P = -2$

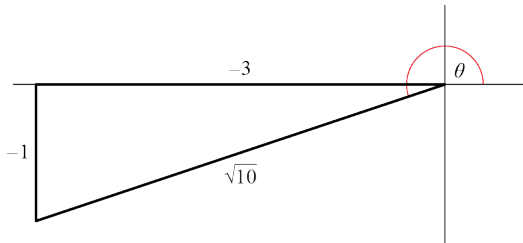
$$-2 = -\frac{2}{3} \cot \theta \Rightarrow \tan \theta = \frac{1}{3}$$

$$\text{So } P \text{ is } \left(\frac{9}{\sqrt{10}}, \frac{2}{\sqrt{10}} \right)$$



or

$$P \text{ is } \left(-\frac{9}{\sqrt{10}}, -\frac{2}{\sqrt{10}} \right)$$



- 10 $y = mx + c$ and $\frac{x^2}{9} + \frac{y^2}{46} = 1$

$$\Rightarrow a^2 = 9, b^2 = 46$$

$$\therefore b^2 + a^2 m^2 = c^2 \Rightarrow 46 + 9m^2 = c^2 \quad (1)$$

$$y = mx + c \text{ and } \frac{x^2}{25} + \frac{y^2}{14} = 1 \Rightarrow a^2 = 25, b^2 = 14$$

$$\therefore b^2 + a^2 m^2 = c^2 \Rightarrow 14 + 25m^2 = c^2 \quad (2)$$

$$(1) - (2) \Rightarrow 32 - 16m^2 = 0$$

$$\Rightarrow m^2 = 2$$

$$\therefore m = \pm\sqrt{2}$$

$$m^2 = 2 \text{ and } 14 + 25m^2 = c^2 \Rightarrow c^2 = 64$$

$$\therefore c = \pm 8$$

$$\text{So } m = \pm\sqrt{2}, c = \pm 8$$

- 11 Use the chain rule to find the gradient of the tangent:

$$\frac{dy}{dx} = \frac{\frac{dy}{d\theta}}{\frac{dx}{d\theta}} = \frac{4 \cos \theta}{-8 \sin \theta} = -\frac{\cos \theta}{2 \sin \theta}$$

The equation of the tangent l_1 is given by

$$y - 4 \sin \theta = -\frac{\cos \theta}{2 \sin \theta} (x - 8 \cos \theta)$$

$$2y \sin \theta - 8 \sin^2 \theta = -x \cos \theta + 8 \cos^2 \theta$$

Equation of the tangent is

$$x \cos \theta + 2y \sin \theta = 8$$

Gradient of the normal l_2 is $\frac{2 \sin \theta}{\cos \theta}$ and its equation is

$$y - 4 \sin \theta = \frac{2 \sin \theta}{\cos \theta} (x - 8 \cos \theta)$$

$$y \cos \theta - 4 \sin \theta \cos \theta = 2x \sin \theta - 16 \sin \theta \cos \theta$$

Equation of the normal is:

$$2x \sin \theta - y \cos \theta = 12 \sin \theta \cos \theta$$

Line l_1 cuts the x -axis at A , so $y = 0$:

$$x \cos \theta = 8 \text{ so } x = 8 \sec \theta$$

A is the point $(8 \sec \theta, 0)$

Line l_2 cuts the y -axis at B , so $x = 0$:

$$-y \cos \theta = 12 \sin \theta \cos \theta \text{ so } y = -12 \sin \theta$$

B is the point $(0, -12 \sin \theta)$

Now find the equation of the line AB .

$$\frac{y - 0}{x - 8 \sec \theta} = \frac{0 - (-12 \sin \theta)}{8 \sec \theta - 0}$$

$$\frac{y}{12 \sin \theta} = \frac{x - 8 \sec \theta}{8 \sec \theta}$$

$$2y \sec \theta = 3x \sin \theta - 24 \sec \theta \sin \theta$$

$$3x \sin \theta - 2y \sec \theta = 24 \sec \theta \sin \theta$$

$$3x \sin \theta \cos \theta - 2y = 24 \sin \theta$$

12 a Use the chain rule to find the gradient:

$$\frac{dy}{dx} = \frac{\frac{dy}{d\theta}}{\frac{dx}{d\theta}} = \frac{3 \cos \theta}{-5 \sin \theta}$$

Then the equation of l_1 is given by

$$y - 3 \sin \theta = -\frac{3 \cos \theta}{5 \sin \theta}(x - 5 \cos \theta)$$

$$5y \sin \theta - 15 \sin^2 \theta = -3x \cos \theta + 15 \cos^2 \theta$$

$$3x \cos \theta + 5y \sin \theta = 15$$

b At Q the line cuts the y -axis, so $x = 0$
Substitute in the equation for line l_1 :

$$5y \sin \theta = 15 \text{ so } y = \frac{3}{\sin \theta}$$

The point Q has coordinates $\left(0, \frac{3}{\sin \theta}\right)$

The gradient of any line perpendicular to l_1 is:

$$\frac{5 \sin \theta}{3 \cos \theta}$$

Then the equation of l_2 is:

$$y - \frac{3}{\sin \theta} = \frac{5 \sin \theta}{3 \cos \theta} x$$

$$3y \sin \theta \cos \theta - 9 \cos \theta = 5x \sin^2 \theta$$

$$5x \sin^2 \theta - 3y \sin \theta \cos \theta = -9 \cos \theta$$

c If l_2 cuts the x -axis at $(-4, 0)$, then substituting into the equation for l_2 gives

$$-20 \sin^2 \theta = -9 \cos \theta$$

$$20(1 - \cos^2 \theta) = 9 \cos \theta$$

$$20 - 20 \cos^2 \theta = 9 \cos \theta$$

$$20 \cos^2 \theta + 9 \cos \theta - 20 = 0$$

Using the quadratic formula to solve gives:

$$\cos \theta = \frac{-9 \pm \sqrt{81 - 4 \times 20 \times (-20)}}{40} = \frac{-9 \pm 41}{40}$$

Obviously $\cos \theta \neq -\frac{52}{40} < -1$, so

$$\cos \theta = \frac{32}{40} = \frac{4}{5}$$

13 a Use the chain rule to find the gradient:

$$\frac{dy}{dx} = \frac{\frac{dy}{dt}}{\frac{dx}{dt}} = \frac{4 \cos t}{-2 \sin t} = -\frac{2 \cos t}{\sin t}$$

Then an equation for l_1 is given by:

$$y - 4 \sin t = -\frac{2 \cos t}{\sin t}(x - 2 \cos t)$$

$$y \sin t - 4 \sin^2 t = -2x \cos t + 4 \cos^2 t$$

$$2x \cos t + y \sin t = 4$$

b Since l_2 is perpendicular to l_1 , the

gradient of l_2 is $\frac{\sin t}{2 \cos t}$

The line passes through the origin, so the equation is $y = mx \Rightarrow y = x \frac{\sin t}{2 \cos t}$

Substituting $y = x \frac{\sin t}{2 \cos t}$ into the equation

of l_1 to find the coordinates of the intersection gives:

$$2x \cos t + x \frac{\sin^2 t}{2 \cos t} = 4$$

$$\Rightarrow 4x \cos^2 t + x \sin^2 t = 8 \cos t$$

$$\Rightarrow x = \frac{8 \cos t}{4 \cos^2 t + \sin^2 t}$$

$$y = \frac{\sin t}{2 \cos t} \times \frac{8 \cos t}{4 \cos^2 t + \sin^2 t}$$

$$= \frac{4 \sin t}{4 \cos^2 t + \sin^2 t}$$

The coordinates of Q are:

$$\left(\frac{8 \cos t}{4 \cos^2 t + \sin^2 t}, \frac{4 \sin t}{4 \cos^2 t + \sin^2 t} \right)$$